

Exam Winter Semester 2022

Student Group

First Name	Surname	Matrikel Nr.

Table of Contents

Exercise E5 Equivalent linear Source (written test, approx. 14 % of a 60-minute written test, WS2022)	3
Exercise E2 Temperature-dependent Resistance (written test, approx. 6 % of a 60-minute written test, WS2022)	6
Exercise E7 Analyzing complex Impedances (written test, approx. 14 % of a 60-minute written test, WS2022)	7
Exercise E10 Complex Impedance Circuit (written test, approx. 15 % of a 60-minute written test, WS2022)	7
Exercise E8 Impedances at different Frequencies (written test, approx. 18 % of a 60-minute written test, WS2022)	10
Exercise E1 Resistance of a Wire by Resistivity (written test, approx. 6 % of a 60-minute written test, WS2022)	10
Exercise E6 Charging Capacitors (written test, approx. 16 % of a 60-minute written test, WS2022)	11
Exercise E4 Pure Resistor Network Simplification (written test, approx. 13 % of a 60-minute written test, WS2022)	12
Exercise E2 Equivalent linear Source (written test, approx. 14 % of a 60-minute written test, WS2022)	14
Exercise E3 Temperature-dependent Resistance (written test, approx. 6 % of a 60-minute written test, WS2022)	18
Exercise E1 Analyzing complex Impedances (written test, approx. 14 % of a 60-minute written test, WS2022)	19
Exercise E1 Complex Impedance Circuit (written test, approx. 15 % of a 60-minute written test, WS2022)	19
Exercise E9 Impedances at different Frequencies (written test, approx. 18 % of a 60-minute written test, WS2022)	22
Exercise E1 Resistance of a Wire by Resistivity (written test, approx. 6 % of a 60-minute written test, WS2022)	22
Exercise E1 Charging Capacitors (written test, approx. 16 % of a 60-minute written test,	

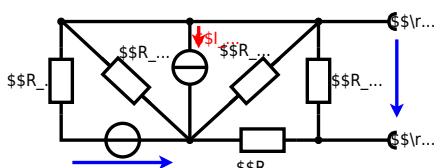
WS2022) 23

Exercise E1 Pure Resistor Network Simplification (written test, approx. 13 % of a 60-minute
written test, WS2022) 24

**Exercise E5 Equivalent linear Source
(written test, approx. 14 % of a 60-minute written test, WS2022)**

The circuit in the following has to be simplified.
Result

$$\begin{aligned} U_{\text{S}} &= U_{\text{AB}} = 4.5 \text{ V} \\ R_{\text{i}} &= R_{\text{AB}} = 6 \Omega \end{aligned}$$



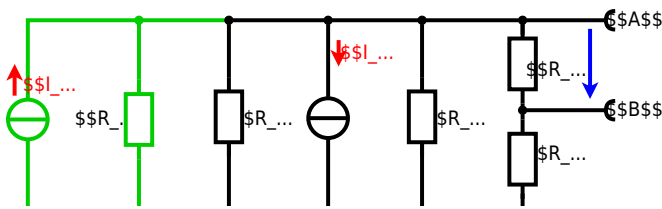
Calculated the internal resistance R_{i} and the source voltage U_{S} of an equivalent linear voltage source on the connectors A and B .
 $R_1=5.0 \Omega$, $U_2=6.0 \text{ V}$, $R_3= 10 \Omega$, $I_4=4.2 \text{ A}$, $R_5=10 \Omega$, $R_6=7.5 \Omega$, $R_7=15 \Omega$
 Use equivalent sources in order to simplify the circuit!

Solution

The best thing is to re-think the wiring like rubber bands and adjust them:



The linear voltage source of U_2 and R_1 can be transformed into a current source $I_2 = \frac{U_2}{R_1}$ and R_1 :



Now a lot of them can be combined. The resistors R_1 , R_3 , R_5 are in parallel, like also I_2 and I_4 :

$$R_{135} = R_1 || R_3 || R_5$$

$$I_{24} = I_2 - I_4 = \frac{U_{24}}{R_1} - I_4$$

The resulting circuit can again be transformed:



Here, the U_{24} is calculated by I_{24} as the following:

$$U_{24} = I_{24} R_6$$

$$U_{AB} = U_{24} \cdot \left(\frac{R_7}{R_6 + R_7 + R_1 || R_3 || R_5} \right) - I_4 \cdot R_1 || R_3 || R_5$$

On the right side of the last circuit, there is a voltage divider given by R_{135} , R_6 , and R_7 .

Therefore the voltage between A and B is given as:

$$U_{AB} = U_{24} \cdot \left(\frac{R_7}{R_6 + R_7 + R_1 || R_3 || R_5} \right) - \left(\frac{U_2}{R_1} - I_4 \right) \cdot \left(R_1 || R_3 || R_5 \right)$$

For the internal resistance R_i the ideal voltage source is substituted by its resistance ($=0 \Omega$, so a short-circuit):

$$R_{AB} = R_7 || (R_6 + R_1 || R_3 || R_5)$$

with $R_1 || R_3 || R_5 = 5 \Omega || 10 \Omega || 10 \Omega = 5 \Omega || 5 \Omega = 2.5 \Omega$:

$$U_{AB} = \left(\frac{6.0 \text{ V}}{5.0 \Omega} \right) - 4.2 \text{ A} \cdot \left(\frac{15 \Omega \cdot 2.5 \Omega}{7.5 \Omega + 15 \Omega + 2.5 \Omega} \right)$$

$$R_{AB} = 15 \Omega || (7.5 \Omega + 2.5 \Omega)$$

Exercise E2 Temperature-dependent Resistance (written test, approx. 6 % of a 60-minute written test, WS2022)

2. The diagram explains the effect of resistance on the refrigeration system. The circuit has a resistance of 10Ω at 25°C and 2.5Ω at 0°C . Your answer.

Its temperature coefficients are: $\alpha = 0.01 \text{ K}^{-1}$ and $\beta = 71 \cdot 10^{-6} \text{ K}^{-2}$

Result
The temperature inside the refrigeration system can reach down to -40°C .

Calculate the resistance of the thermostat at -40°C .

The power of the resistor $P = U \cdot I$ and $I = \frac{U}{R}$. Therefore, a solution is to increase the heat flow up the refrigeration system.

Therefore, with constant U and increasing R the power decreases. Ten times more resistance decreases the heat flow to one-tenth.

$$R = R_0 \cdot (1 + \alpha \cdot \Delta T + \beta \cdot \Delta T^2)$$

$$\text{with } \Delta T = T_{\text{end}} - T_{\text{start}} \implies R = 10 \text{ k}\Omega \cdot \left(1 + 0.01 \text{ K}^{-1} \cdot (-40^\circ \text{C} - 25^\circ \text{C}) + 71 \cdot 10^{-6} \text{ K}^{-2} \cdot (-40^\circ \text{C} - 25^\circ \text{C})^2 \right)$$

Exercise E7 Analyzing complex Impedances
 (written test, approx. 14 % of a 60-minute written test, WS2022)

2. Calculate the complex impedance Z of the circuit shown in the figure through the components. R and X_L shall be given.

After analysis, the full bridge network can be simplified and the voltage U in parallel with Z is $U = (20 \text{ V} + j4 \text{ V}) + 5 \text{ V}$.

Solution
 .. Calculate the physical values of the two components.
 Solution $R = 10 \text{ } \Omega$ and $X_L = 20 \text{ } \Omega$

Solution

$$\underline{I} = \frac{\underline{U}}{\underline{Z}} \quad \text{with } \underline{U} = 25 \text{ V}$$
 The voltage U is the sum of the voltages across the components. The resulting impedance is $Z = 10 \text{ } \Omega + j20 \text{ } \Omega$.
 Therefore, the current I is $I = \frac{25 \text{ V}}{10 \text{ } \Omega + j20 \text{ } \Omega} = 1 \text{ A} - j2 \text{ A}$.
 With the complex part $\varphi = \arctan\left(\frac{-2}{1}\right) = -63.4^\circ$.
 The phase φ can be calculated as $\varphi = \arctan\left(\frac{-4.68}{0.24}\right) = -87.0^\circ$.

Exercise E10 Complex Impedance Circuit
 (written test, approx. 15 % of a 60-minute written test, WS2022)

2. Calculate the complex impedance Z of the circuit shown in the figure. The voltage source $u(t) = 3.0 \text{ V} \cdot \sin(2\pi \cdot 15 \text{ kHz} \cdot t)$ is connected with an inductor of $330 \text{ } \mu\text{H}$ and a capacitor of $0.22 \text{ } \mu\text{F}$, all in series.

Solution
 Result

$$Z = 19.8 \text{ } \Omega - j48.2 \text{ } \Omega$$

Draw the circuit diagram of the given network and all components, voltages, and currents.

Solution

$$Z = \frac{U}{I} = \frac{3 \text{ V}}{1 \text{ A}} = 3 \text{ } \Omega$$

$$Z_C = \frac{1}{j\omega C} = \frac{1}{j \cdot 2\pi \cdot 15 \text{ kHz} \cdot 0.22 \text{ } \mu\text{F}} = -j48.2 \text{ } \Omega$$

$$Z_L = j\omega L = j \cdot 2\pi \cdot 15 \text{ kHz} \cdot 330 \text{ } \mu\text{H} = j19.8 \text{ } \Omega$$



Exercise E8 Impedances at different Frequencies
(written test, approx. 18 % of a 60-minute written test, WS2022)

2. A series circuit consists of a resistor with a resistance of $R_1 = 1.00 \text{ k}\Omega$, a capacitor with a capacitance of $C_1 = 40 \text{ nF}$, and an AC voltage source with a voltage of $U = 10 \text{ V}$ and a frequency of $f = 4 \text{ MHz}$. Calculate the absolute value of the impedance Z of the circuit.

Solution

$$Z = \sqrt{R_1^2 + X_C^2}$$

$$Z = \sqrt{(1.00 \text{ k}\Omega)^2 + \left(\frac{10 \text{ V}}{2\pi \cdot 4 \text{ MHz} \cdot 40 \text{ nF}}\right)^2}$$

$$Z = \sqrt{(1.00 \text{ k}\Omega)^2 + (0.995 \text{ k}\Omega)^2}$$

$$Z = 1.41 \text{ k}\Omega$$

A series circuit means that the current is constant on every component. The equivalent impedance for R and X_C combined is given by $Z = \sqrt{R^2 + X_C^2}$. Parallel circuit means that the voltage is the same on R_1 and R_2 . $\frac{1}{Z} = \frac{1}{R_1} + \frac{1}{R_2}$. Since U is perpendicular to R_2 , this can be simplified to $Z = \sqrt{R_1^2 + R_2^2}$. R_2 is perpendicular to X_C . (It has to, since R_2 is perpendicular to U and X_C is perpendicular to U .) $Z = \sqrt{R_1^2 + X_C^2}$. Therefore, the resulting current of the parallel circuit is given as: $I = \frac{U}{Z}$. This can be rearranged to $Z = \frac{U}{I} = \frac{10 \text{ V}}{7 \text{ mA}} = 1.43 \text{ k}\Omega$. $Z = \sqrt{R_1^2 + X_C^2}$. $1.43 \text{ k}\Omega = \sqrt{(1.00 \text{ k}\Omega)^2 + X_C^2}$. $X_C = \sqrt{(1.43 \text{ k}\Omega)^2 - (1.00 \text{ k}\Omega)^2} = 0.99 \text{ k}\Omega$. Back to the first formula: $R_2 = \frac{1}{\frac{1}{Z} - \frac{1}{R_1}} = \frac{1}{\frac{1}{1.43 \text{ k}\Omega} - \frac{1}{1.00 \text{ k}\Omega}} = 0.99 \text{ k}\Omega$.

Exercise E1 Resistance of a Wire by Resistivity
(written test, approx. 6 % of a 60-minute written test, WS2022)

2. Heating element made of nichrome wire with a temperature coefficient of $\alpha = 0.004 \text{ K}^{-1}$. Electric power dissipation (= heat flow) of $P = 40 \text{ W}$ is necessary. Calculate the current I and the operating voltage U for heating elements. The Nichrome wire has a resistivity of $\rho = 1.10 \cdot 10^{-6} \text{ }\Omega \cdot \text{m}$.

The heating element is $l = 3 \text{ m}$ long and has a diameter of $d = 3.57 \text{ mm}$.
 Calculate the resistance R of the heating element.

Solution

$$R = \frac{\rho \cdot l}{A} = \frac{1.10 \cdot 10^{-6} \text{ }\Omega \cdot \text{m} \cdot 3 \text{ m}}{\pi \cdot \left(\frac{3.57 \text{ mm}}{2}\right)^2} = 0.33 \text{ }\Omega$$

Solution

$$P = U \cdot I = R \cdot I^2 \quad \rightarrow \quad I = \sqrt{\frac{P}{R}} = \sqrt{\frac{40 \text{ W}}{0.33 \text{ }\Omega}} = 11 \text{ A}$$

$$U = I \cdot R = 11 \text{ A} \cdot 0.33 \text{ }\Omega = 3.6 \text{ V}$$

$$\sqrt{\frac{P}{R}} = \sqrt{\frac{40 \text{ W}}{0.33 \cdot \Omega}} \quad \text{align*}$$

$$\begin{aligned} R &= \rho \cdot l \cdot \frac{1}{A} \quad \& \quad | \quad \text{with } A = r^2 \cdot \pi = \\ &= \frac{1}{4} d^2 \cdot \pi \quad \& \quad R = \rho \cdot l \cdot \frac{4 \cdot l}{d^2 \cdot \pi} \quad \& \quad R = \\ &= 1.10 \cdot 10^{-6} \cdot \Omega \cdot \text{m} \cdot \frac{4 \cdot 3 \cdot \text{m}}{(3.57 \cdot 10^{-3} \cdot \text{m})^2 \cdot \pi} \quad \& \quad \end{aligned}$$

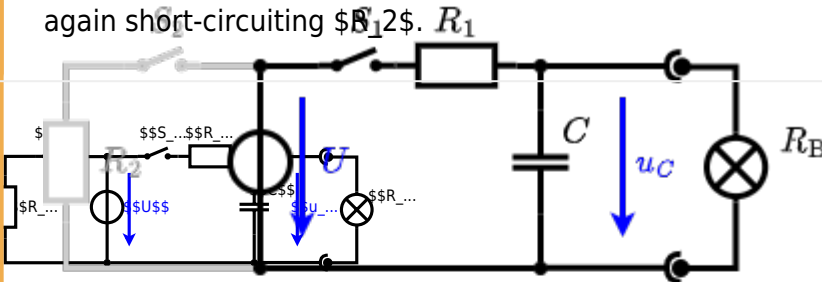
Exercise E6 Charging Capacitors
(written test, approx. 16 % of a 60-minute written test, WS2022)

The circuit (with the light bulb) is a series of \$R_1\$ and \$R_2\$ and a capacitor \$C\$. The switch \$S_1\$ is closed at \$t_0=0\$ s. The voltage across the capacitor is again \$0\$ V at the moment \$t_0=0\$ s when the switch \$S_1\$ is closed. Calculate the voltage \$u_c(t_2)\$ across the capacitor at \$t_2=1\$ ms after closing the switch.

Solution: To solve this, first create an equivalent linear voltage source from \$U\$, \$R_1\$, and \$R_2\$.

The ideal voltage source \$U\$ is in series with \$R_1\$ and \$R_2\$. The voltage across the capacitor is \$u_c(t) = U \cdot (1 - e^{-t/\tau})\$.

On an alternative view, one can try to create an equivalent linear voltage source again. Then, the internal resistance is given by substituting the ideal voltage source is again short-circuiting \$S_1\$.



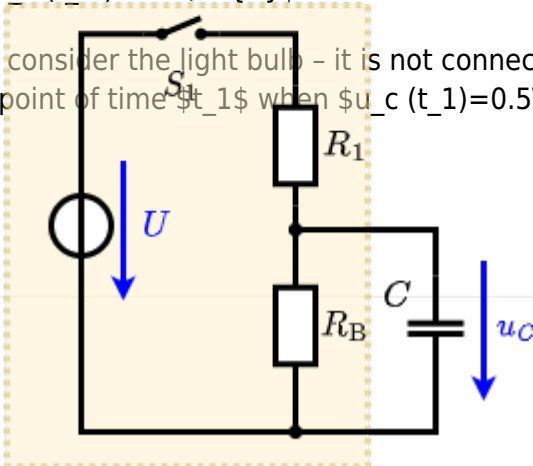
The circuit contains a voltage source \$U=12\$ V, a switch \$S_1\$, a resistor of \$R_1=20\$ \$\Omega\$ and a capacitor of \$C=100\$ \$\mu\$F.

The switch \$S_2\$ to an additional consumer \$R_2\$ will be considered to be open for the first tasks. At the moment \$t_0=0\$ s the switch \$S_1\$ is closed, the voltage across the capacitor is \$u_c(t_0)=0\$ V.

.. First do not consider the light bulb - it is not connected to the RC circuit.

Calculate the point of time \$t_1\$ when \$u_c(t_1)=0.5 \cdot U\$.

Solution



An equivalent linear voltage source can be given with U_s , R_1 , and R_B as seen in yellow.

Therefore, the voltage of the equivalent linear voltage source is: $U_s = U \cdot \frac{R_B}{R_1 + R_B} = \frac{1}{2} \cdot U$ The internal resistance is given by substituting the ideal voltage source with its resistance ($R = 0 \Omega$, short-circuit).

$$R_i = R_1 \parallel R_B = 10 \Omega$$

$$u_c(t) = U_s \cdot (1 - e^{-t/(R_i \cdot C)}) = \frac{1}{2} \cdot U \cdot (1 - e^{-t/(10 \Omega \cdot 100 \mu F)})$$

The following formula describes the time course of $u_c(t)$ which has to be $u_c(t_1) = 0.5 \cdot U$:
$$u_c(t) = U \cdot (1 - e^{-t/\tau}) = 0.5 \cdot U$$
 It has to be rearranged to $(1 - e^{-t/\tau}) = 0.5 \implies e^{-t/\tau} = 0.5 \implies t/\tau = \ln(0.5) \implies t = \tau \cdot \ln(0.5) = R_1 \cdot C \cdot \ln(0.5)$



Exercise E4 Pure Resistor Network Simplification (written test, approx. 13 % of a 60-minute written test, WS2022)

The following shall be solved at 0.10 A, $R_1 = R_2 = R_3 = 10 \Omega$ and the voltage $U = 10 \text{ V}$ is given. R_B .

Solution

$$R_{\text{eq}} = 132.8 \Omega$$

Now a wye-delta transformation is necessary.



Since $R_2=R_3$ and based on the equations for the transformation, the transformed R_Y is given as:

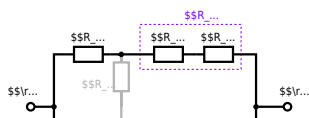
$$R_Y = \frac{R_2 \cdot R_2}{R_2 + R_2 + R_2} = \frac{(100 \Omega)^2}{3 \cdot 100 \Omega} = \frac{1}{3} \cdot 100 \Omega = 33.33 \Omega$$

The equivalent resistor is given by a parallel configuration of resistors in series:

$$R_{\text{eq}} = R_Y + (R_Y + R_1 + R_1) \parallel (R_Y + R_2) \parallel R_{\text{eq}} = 33.33 \Omega + (33.33 \Omega + 400 \Omega) \parallel (33.33 \Omega + 100 \Omega)$$

1. The switch shall now be open. Calculate the equivalent resistance R_{eq} between A and B .

Solution



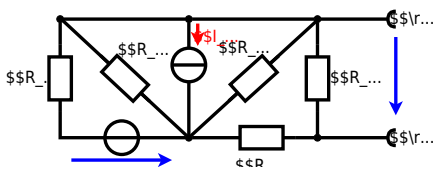
The equivalent resistor is given by a parallel configuration of resistors in series:

$$R_{\text{eq}} = (R_2 + R_1 + R_{-1}) \parallel (R_2 + R_2) \parallel R_{\text{eq}} = (100 \Omega + 200 \Omega + 200 \Omega) \parallel (100 \Omega + 100 \Omega) \parallel R_{\text{eq}} = (500 \Omega) \parallel (200 \Omega) \parallel R_{\text{eq}} = \frac{500 \Omega \cdot 200 \Omega}{500 \Omega + 200 \Omega} \parallel$$

**Exercise E2 Equivalent linear Source
(written test, approx. 14 % of a 60-minute written test, WS2022)**

The circuit in the following has to be simplified.
Result

$$U_{\text{s}} = U_{\text{AB}} = 4.5 \text{ V} \quad R_{\text{i}} = R_{\text{AB}} = 6 \Omega$$



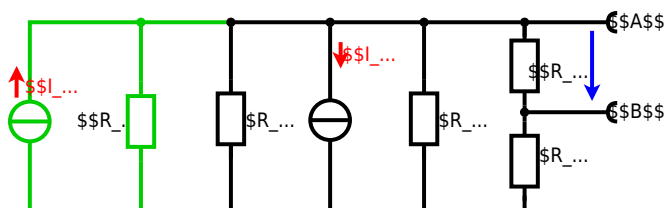
Calculate the internal resistance R_i and the source voltage U_s of an equivalent linear voltage source on the connectors A and B . $R_1=5.0 \Omega$, $U_2=6.0 \text{ V}$, $R_3=10 \Omega$, $I_4=4.2 \text{ A}$, $R_5=10 \Omega$, $R_6=7.5 \Omega$, $R_7=15 \Omega$. Use equivalent sources in order to simplify the circuit!

Solution

The best thing is to re-think the wiring like rubber bands and adjust them:



The linear voltage source of U_2 and R_1 can be transformed into a current source $I_2 = \frac{U_2}{R_1}$ and R_1 :



Now a lot of them can be combined. The resistors R_1 , R_3 , R_5 are in parallel, like also I_2 and I_4 :

$$R_{135} = R_1 || R_3 || R_5$$

$$I_{24} = I_2 - I_4 = \frac{U_{24}}{R_1} - I_4$$

The resulting circuit can again be transformed:



Here, the U_{24} is calculated by I_{24} as the following:

$$U_{24} = I_{24} \cdot R_{135} + I_4 \cdot R_1$$

$$U_{AB} = U_{24} \cdot \left(\frac{R_7}{R_6 + R_7 + R_1 || R_3 || R_5} \right) - I_4 \cdot (R_1 || R_3 || R_5)$$

On the right side of the last circuit, there is a voltage divider given by R_{135} , R_6 , and R_7 .

Therefore the voltage between A and B is given as:

$$U_{AB} = U_{24} \cdot \left(\frac{R_7}{R_6 + R_7 + R_1 || R_3 || R_5} \right) - \left(\frac{U_2}{R_1} - I_4 \right) \cdot (R_1 || R_3 || R_5)$$

For the internal resistance R_i the ideal voltage source is substituted by its resistance ($=0 \Omega$, so a short-circuit):

$$R_{AB} = R_7 || (R_6 + R_1 || R_3 || R_5)$$

with $R_1 || R_3 || R_5 = 5 \Omega || 10 \Omega || 10 \Omega = 5 \Omega || 5 \Omega = 2.5 \Omega$:

$$U_{AB} = \left(\frac{6.0 \text{ V}}{5.0 \Omega} \right) - 4.2 \Omega \cdot \left(\frac{15 \Omega \cdot 2.5 \Omega}{7.5 \Omega + 15 \Omega + 2.5 \Omega} \right)$$

$$R_{AB} = 15 \Omega || (7.5 \Omega + 2.5 \Omega)$$

Exercise E3 Temperature-dependent Resistance (written test, approx. 6 % of a 60-minute written test, WS2022)

2. A refrigerator is explained with the effect of resistance on refrigeration systems. The circuit has a resistance of 10Ω at 25°C and 25Ω at -40°C .

Its temperature coefficients are: $\alpha = 0.01 \text{ K}^{-1}$ and $\beta = 71 \cdot 10^{-6} \text{ K}^{-2}$.

Result The temperature inside the refrigeration system can reach down to -40°C .

$$R_{-40} = 10 \cdot (1 + 0.01 \cdot (-40 - 25) + 71 \cdot 10^{-6} \cdot (-40 - 25)^2) = 25 \Omega$$

The power of the resistor is $P = U^2 / R$. Therefore, a solution is to heat up the refrigeration system.

Therefore, with constant U and increasing R the power decreases. Ten times more resistance decreases the heat flow to one-tenth.

$$R = R_0 \cdot (1 + \alpha \cdot \Delta T + \beta \cdot \Delta T^2)$$

$$\Delta T = T_{\text{end}} - T_{\text{start}}$$

$$R = 10 \Omega \cdot \left(1 + 0.01 \cdot (-40 - 25) + 71 \cdot 10^{-6} \cdot (-40 - 25)^2 \right)$$

Exercise E1 Analyzing complex Impedances
 (written test, approx. 14 % of a 60-minute written test, WS2022)

2. Calculate the complex impedance Z of the circuit shown in the figure through the components. R and X_L shall be given.

After analysis, the full bridge network can be simplified, and the voltage U in phase with the current I can be determined.

Solution
 .. Calculate the physical values of the two components.
 Solution $R = 10 \Omega$ and $X_L = 20 \Omega$

Solution

$$\underline{I} = \frac{\underline{U}}{\underline{Z}} \quad \text{with } \underline{U} = 50 \text{ V}$$
 The voltage U is the voltage across the 10Ω resistor. The resulting impedance is $Z = 10 + j20 \Omega$.
 Therefore, the current I is $I = \frac{50}{10 + j20} = 1.96 - j0.98 \text{ A}$.
 The phase angle φ is $\varphi = \arctan\left(\frac{-0.98}{1.96}\right) = -26.6^\circ$.
 With the complex part $Z = 10 + j20 \Omega$, the voltage U is $U = 50 \text{ V}$.
 The phase φ can be calculated as $\varphi = \arctan\left(\frac{-20}{10}\right) = -63.4^\circ$.

Exercise E1 Complex Impedance Circuit
 (written test, approx. 15 % of a 60-minute written test, WS2022)

2. Calculate the circuit impedance Z for the circuit shown in the figure. The voltage source $u(t) = 3.0 \sin(2\pi \cdot 15 \cdot t) \text{ V}$ is connected to a series combination of an inductor of $330 \mu\text{H}$ and a capacitor of $0.22 \mu\text{F}$.

Solution
 Result
 $Z = 19.8 - j48.2 \Omega$

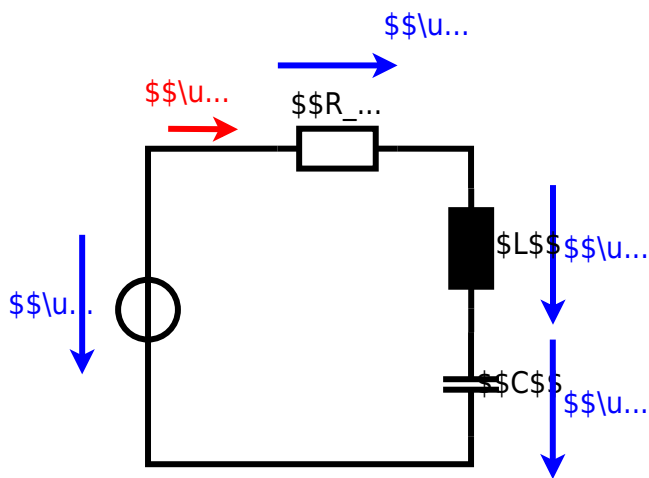
Draw the equivalent circuit diagram of the network with all components, voltages, and currents.

$$Z = \frac{U}{I} \quad \text{with } U = 3.0 \text{ V}$$

$$Z_C = \frac{1}{j\omega C} = \frac{1}{j \cdot 2\pi \cdot 15 \cdot 0.22 \cdot 10^{-6}} = -j19.8 \Omega$$

$$Z_L = j\omega L = j \cdot 2\pi \cdot 15 \cdot 330 \cdot 10^{-6} = j31.1 \Omega$$

$$Z = Z_C + Z_L = -j19.8 + j31.1 = j11.3 \Omega$$



Exercise E9 Impedances at different Frequencies
(written test, approx. 18 % of a 60-minute written test, WS2022)

2. A series circuit consists of a resistor with a resistance of $R_1 = 1.00 \text{ k}\Omega$, a capacitor with a capacitance of $C_1 = 40 \text{ nF}$, and an inductor with an inductance of $L_1 = 4.7 \text{ }\mu\text{H}$. The circuit is connected to an AC voltage source with a peak-to-peak voltage of $U_{pp} = 10 \text{ V}$ and a frequency of $f = 4 \text{ MHz}$. Calculate the absolute value of the impedance $|Z|$ of the circuit.

Solution

$$|Z| = \sqrt{R^2 + (X_L - X_C)^2}$$

$$|Z| = \sqrt{1.00^2 + (2\pi \cdot 4 \cdot 10^6 \cdot 4.7 \cdot 10^{-6} - \frac{1}{2\pi \cdot 4 \cdot 10^6 \cdot 40 \cdot 10^{-9}})^2}$$

A series circuit means that the current is constant on every component.
 The equivalent impedance for R and L combined is given by $Z_{RL} = R + jX_L$
 Parallel circuit means that the voltage is the same on R and C .
 $Z_{RC} = \frac{R \cdot X_C}{R + jX_C}$
 Since X_C is perpendicular to R , this can be simplified to $Z_{RC} = \frac{R \cdot X_C}{\sqrt{R^2 + X_C^2}}$
 Z_{RC} is perpendicular to X_C (It has to, since R is perpendicular to X_C).
 Z_{RL} and Z_{RC} are in parallel, so the resulting current of the parallel circuit is given as:

$$I_{total} = I_{RL} + I_{RC}$$

This can be rearranged to
$$I_{total} = \frac{U}{\sqrt{R^2 + X_C^2}}$$

Back to the first formula:
$$|Z| = \frac{U}{I_{total}}$$

Exercise E1 Resistance of a Wire by Resistivity
(written test, approx. 6 % of a 60-minute written test, WS2022)

2. Heating elements are used to heat the oven with a temperature of $180 \text{ }^\circ\text{C}$. The electric power dissipation (= heat flow) of $P = 40 \text{ W}$ is necessary.
 Calculate the current I needed to operate the heating elements.
 The Nichrome wire has a resistivity of $\rho = 1.10 \cdot 10^{-6} \text{ }\Omega \cdot \text{m}$.
 The heating element is $l = 3 \text{ m}$ long and has a diameter of $d = 3.57 \text{ mm}$.
 Calculate the resistance R of the heating element.

Solution

$$P = U \cdot I = R \cdot I^2 \quad \rightarrow \quad I = \sqrt{\frac{P}{R}}$$

$$\sqrt{\frac{P}{R}} = \sqrt{\frac{40 \text{ W}}{0.33 \cdot \Omega}} \quad \text{align*}$$

$$\begin{aligned} R &= \rho \cdot l \cdot \frac{1}{A} \quad \& \quad | \quad \text{with } A = r^2 \cdot \pi = \\ &= \frac{1}{4} d^2 \cdot \pi \quad \& \quad R = \rho \cdot l \cdot \frac{4 \cdot l}{d^2 \cdot \pi} \quad \& \quad R = \\ &= 1.10 \cdot 10^{-6} \cdot \Omega \cdot \text{m} \cdot \frac{4 \cdot 3 \cdot \text{m}}{(3.57 \cdot 10^{-3} \cdot \text{m})^2 \cdot \pi} \quad \& \quad \end{aligned}$$

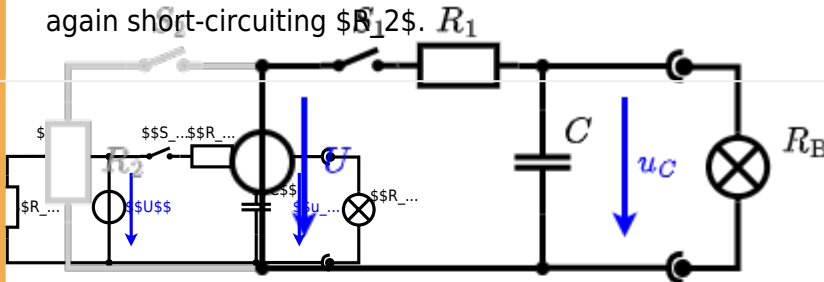
Exercise E1 Charging Capacitors
(written test, approx. 16 % of a 60-minute written test, WS2022)

The circuit (with the light bulb) is a series of R_1 and R_2 and a capacitor C and a switch S_1 and a switch S_2 . The voltage across the capacitor is again 0 V at the moment $t_0 = 0 \text{ s}$ when the switch S_1 is closed. Calculate the voltage $u_c(t_2)$ across the capacitor at $t_2 = 1 \text{ ms}$ after closing the switch.

Solution: To solve this, first create an equivalent linear voltage source from U , R_1 , and R_2 .

The ideal voltage source U is in series with R_1 and R_2 . The voltage u_c is independent of this series.

On an alternative view, one can try to create an equivalent linear voltage source again. Then, the internal resistance is given by substituting the ideal voltage source is again short-circuiting S_2 .



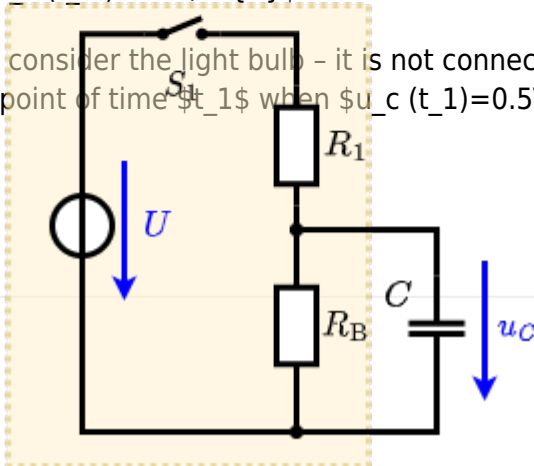
The circuit contains a voltage source $U = 12 \text{ V}$, a switch S_1 , a resistor of $R_1 = 20 \Omega$ and a capacitor of $C = 100 \mu\text{F}$.

The switch S_2 to an additional consumer R_2 will be considered to be open for the first tasks. At the moment $t_0 = 0 \text{ s}$ the switch S_1 is closed, the voltage across the capacitor is $u_c(t_0) = 0 \text{ V}$.

.. First do not consider the light bulb - it is not connected to the RC circuit.

Calculate the point of time t_1 when $u_c(t_1) = 0.5 \cdot U$.

Solution



An equivalent linear voltage source can be given with U_s , R_1 , and R_B as seen in yellow.

Therefore, the voltage of the equivalent linear voltage source is: $U_s = U \cdot \frac{R_B}{R_1 + R_B} = \frac{1}{2} \cdot U$ The internal resistance is given by substituting the ideal voltage source with its resistance ($R = 0 \Omega$, short-circuit).

$$R_i = R_1 \parallel R_B = 10 \Omega$$

$$u_c(t) = U_s \cdot (1 - e^{-t/(R_i \cdot C)}) = \frac{1}{2} \cdot U \cdot (1 - e^{-t/(10 \Omega \cdot 100 \mu F)})$$

So, here only R_1 and C gives the time constant: $\tau = R_1 \cdot C$

The following formula describes the time course of $u_c(t)$ which has to be $u_c(t_1) = 0.5 \cdot U$: $u_c(t) = U \cdot (1 - e^{-t/\tau}) = 0.5 \cdot U$
 It has to be rearranged to $(1 - e^{-t/\tau}) = 0.5 \implies e^{-t/\tau} = 0.5 \implies -t/\tau = \ln(0.5) \implies t = \tau \cdot \ln(0.5)$



Exercise E1 Pure Resistor Network Simplification (written test, approx. 13 % of a 60-minute written test, WS2022)

The following shall be solved at a rate of $R_1 = R_2 = R_3 = 10 \Omega$ and the voltage $U = 10V$ is given. R_B .

Solution

$$R_{\text{eq}} = 13.8 \Omega$$

Now a wye-delta transformation is necessary.



Since $R_2=R_3$ and based on the equations for the transformation, the transformed R_Y is given as:

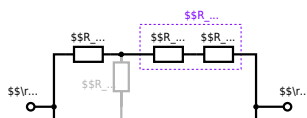
$$R_Y = \frac{R_2 \cdot R_2}{R_2 + R_2 + R_2} = \frac{(100 \Omega)^2}{3 \cdot 100 \Omega} = \frac{1}{3} \cdot 100 \Omega = 33.33 \Omega$$

The equivalent resistor is given by a parallel configuration of resistors in series:

$$R_{\text{eq}} = R_Y + (R_Y + R_1 + R_1) \parallel (R_Y + R_2) \parallel R_{\text{eq}} = 33.33 \Omega + (33.33 \Omega + 400 \Omega) \parallel (33.33 \Omega + 100 \Omega)$$

1. The switch shall now be open. Calculate the equivalent resistance R_{eq} between A and B .

Solution



The equivalent resistor is given by a parallel configuration of resistors in series:

$$R_{\text{eq}} = (R_2 + R_1 + R_1) \parallel (R_2 + R_2) \parallel R_{\text{eq}} = (100 \sim \Omega + 200 \sim \Omega + 200 \sim \Omega) \parallel (100 \sim \Omega + 100 \sim \Omega) \parallel R_{\text{eq}} = \{500 \sim \Omega \cdot 200 \sim \Omega\} \over {500 \sim \Omega + 200 \sim \Omega}$$

From: <https://wiki.mexle.org/> - MEXLE Wiki

Permanent link: https://wiki.mexle.org/electrical_engineering_1/ws2022_exam?rev=1680124779

Last update: 2023/03/29 23:19

