

Block 16 - Ampère's Law and Magnetomotive Force (MMF)

Student Group

First Name	Surname	Matrikel Nr.

Table of Contents

- Block 16 - Ampère's Law and Magnetomotive Force (MMF)** 2
- Learning objectives* 2
- Preparation at Home* 2
- 90-minute plan* 2
- Conceptual overview* 2
- Core content* 2
- Generalization of the Magnetic Field Strength* 2
 - Notice: 3
 - Notice: 4
- Common pitfalls* 5
- Exercises* 5
 - Task 3.2.3 Magnetic Potential Difference 5
 - Exercise E11 Magnetic Voltage (written test, approx. 6 % of a 120-minute written test, SS2021) 6
 - Exercise E7 Magnetic Field Lines (written test, approx. 6 % of a 120-minute written test, SS2024) 7
 - Exercise E1 Magnetic Potential (written test, approx. 8 % of a 120-minute written test, SS2024) 9
- Embedded resources* 10

Block 16 - Ampère's Law and Magnetomotive Force (MMF)

Learning objectives

After this 90-minute block, you can

- ...

Preparation at Home

Well, again

- read through the present chapter and write down anything you did not understand.
- Also here, there are some clips for more clarification under 'Embedded resources' (check the text above/below, sometimes only part of the clip is interesting).

For checking your understanding please do the following exercises:

- ...

90-minute plan

1. Warm-up (x min):
 1.
2. Core concepts & derivations (x min):
 1. ...
3. Practice (x min): ...
4. Wrap-up (x min): Summary box; common pitfalls checklist.

Conceptual overview

1. ...

Core content

Generalization of the Magnetic Field Strength

So far, only the rotational symmetric problem on a single wire was considered in formula, when the current I and the length s of a magnetic field line around it is given:

$$\begin{aligned} \quad H_{\varphi} &= \frac{I}{s} = \frac{I}{2 \cdot \pi \cdot r} \quad \Leftrightarrow \end{aligned}$$

$$\oint \mathbf{H} \cdot d\mathbf{s} = I_{enc} \quad | \quad \text{applies only to the long, straight conductor}$$

Now, this shall be generalized. For this purpose, we will look back at the electric field. For the electric field strength E of a capacitor with two plates at a distance of s and the potential difference U holds:

$$U = E \cdot s \quad | \quad \text{applies to capacitor only}$$

In words: The potential difference is given by adding up the field strength along the path of a probe from one plate to the other.

This was extended to the voltage between two points 1 and 2 . Additionally, we know by Kirchhoff's voltage law that the voltage on a closed path is "0".

$$\oint \mathbf{E} \cdot d\mathbf{s} = 0$$

We can now try to look for similarities. Also for the magnetic field, the magnitude of the field strength is summed up along a path to arrive at another field-describing quantity.

Because of the similarity the so-called **magnetic potential difference V_m** between point 1 and 2 is introduced:

$$V_m = \int \mathbf{H} \cdot d\mathbf{s} \quad | \quad \text{applies to rotational symmetric problems only}$$

$$V_m = \int \mathbf{H} \cdot d\mathbf{s} = \theta$$

We need to take a closer look here. Any closed path in the static electric field leads to a potential difference of $\oint \mathbf{E} \cdot d\mathbf{s} = 0$.

BUT: closed paths in the static magnetic field leads to a magnetic potential difference which is **not mandatorily** 0 ! $V_m = \oint \mathbf{H} \cdot d\mathbf{s} = \theta$

Another new quantity is introduced: the **magnetic voltage θ** :

1. The magnetic voltage θ is the magnetic potential difference on a closed path.
2. Since the magnetic voltage θ is valid for exactly one turn along our single wire, θ is also equal to the current through the wire:

$$\theta = H \cdot s = I \quad | \quad \text{applies only to the long, straight conductor}$$
3. The magnetic potential difference can take a fraction or a multiple of one turn and is therefore **not mandatorily** equal to I .
4. The magnetic voltage is generalized in the following box.

Notice:

The path integral of the magnetic field strength along an arbitrary closed path is equal to the free currents (= current density) through the surface enclosed by the path.

The magnetic voltage θ (and therefore the current) is the cause of the magnetic field strength.

This leads to the **Ampere's Circuital Law**

$\oint_{\mathcal{S}} \vec{H} \cdot d\vec{s} = \theta$	<p>The magnetic voltage θ can be given as</p> <ul style="list-style-type: none"> • $\theta = I$ for a single conductor • $\theta = N \cdot I$ for a coil • $\theta = \sum_n I_n$ for multiple conductors • $\theta = \int_A \vec{S} \cdot d\vec{A}$ for any spatial distribution (see block15)
---	--

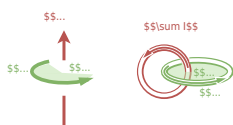
The unit of the magnetic voltage θ is **Ampere** (or **Ampere-turns**).

Notice:

$\oint_{\mathcal{S}} \vec{s}$ and $\oint_{\mathcal{S}} \vec{A}$ in $\oint_{\mathcal{S}} \vec{H} \cdot d\vec{s} = \theta = \int_A \vec{S} \cdot d\vec{A}$ build a right-hand system.

1. Once the thumb of the right hand is pointing along $\oint_{\mathcal{S}} \vec{A}$, the fingers of the right hand show the correct direction for $\oint_{\mathcal{S}} \vec{s}$ for positive \vec{H} and \vec{S}
2. Currents into the direction of the right hand's thumb count positive. Currents antiparallel to it count negative.

Fig. 1: Right hand rule



Path

- The magnetic potential difference is given as the **sum of the current through the area within a closed path.**
- The direction of the current and the path have to be considered with the righthand rule.

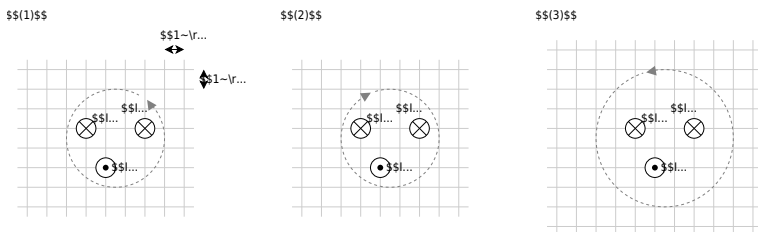
Exercise E11 Magnetic Voltage (written test, approx. 6 % of a 120-minute written test, SS2021)

The following images show cross-sections of electrical cables.

A closed path is shown as a dashed line. The magnetic voltage θ on these paths shall be analyzed.

The following values are given for the currents:

- $I_1 = 5 \text{ A}$
- $I_2 = 5 \text{ A}$
- $I_3 = 1 \text{ A}$
- $I_4 = 4 \text{ A}$



Specify which magnetic voltages $\theta_{(1)}$, $\theta_{(2)}$, and $\theta_{(3)}$ result. Note the direction of the path in each case!

Path

For the resulting current the direction of the path has to be considered with the right-hand rule:

- $$I_{(1)} = +I_2 - I_1 - I_3 \quad \rightarrow \quad \theta_{(1)} = 2 \text{ A} - 5 \text{ A} - 1 \text{ A}$$
- $$I_{(2)} = +I_3 + I_4 - I_1 \quad \rightarrow \quad \theta_{(2)} = 1 \text{ A} + 4 \text{ A} - 5 \text{ A}$$
- $$I_{(3)} = +I_3 - I_4 - I_2 \quad \rightarrow \quad \theta_{(3)} = 1 \text{ A} - 4 \text{ A} - 2 \text{ A}$$

Exercise E7 Magnetic Field Lines

(written test, approx. 6 % of a 120-minute written test, SS2024)

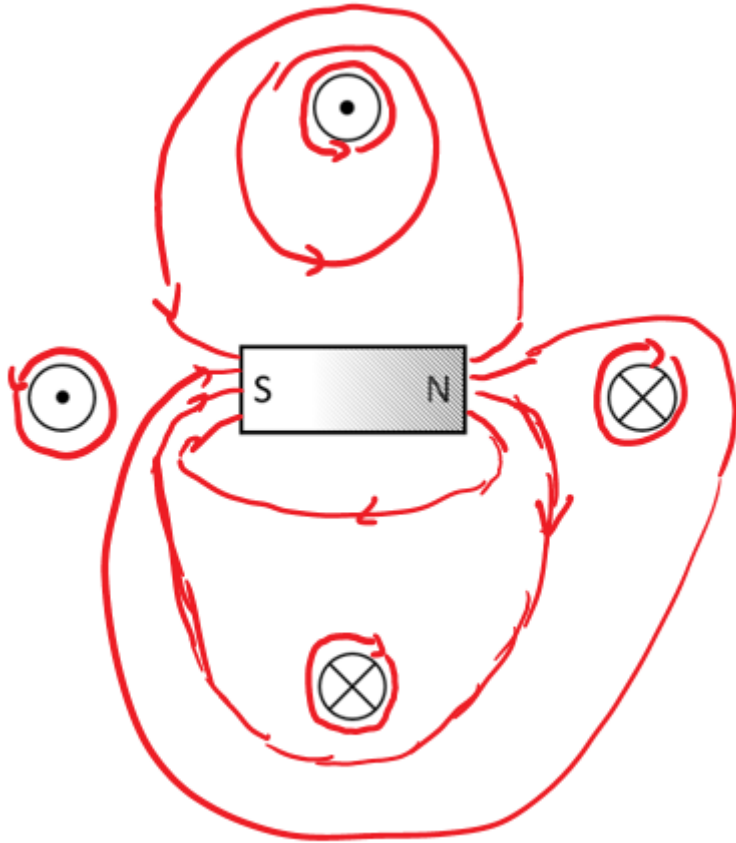
The following setup illustrates how a permanent magnet affects the H-field, based on the fundamental definition of the H-field.

- Four conductors are located perpendicular to the plane of the diagram

Result: All of them conduct a current with the same magnitude, but not in the same direction.

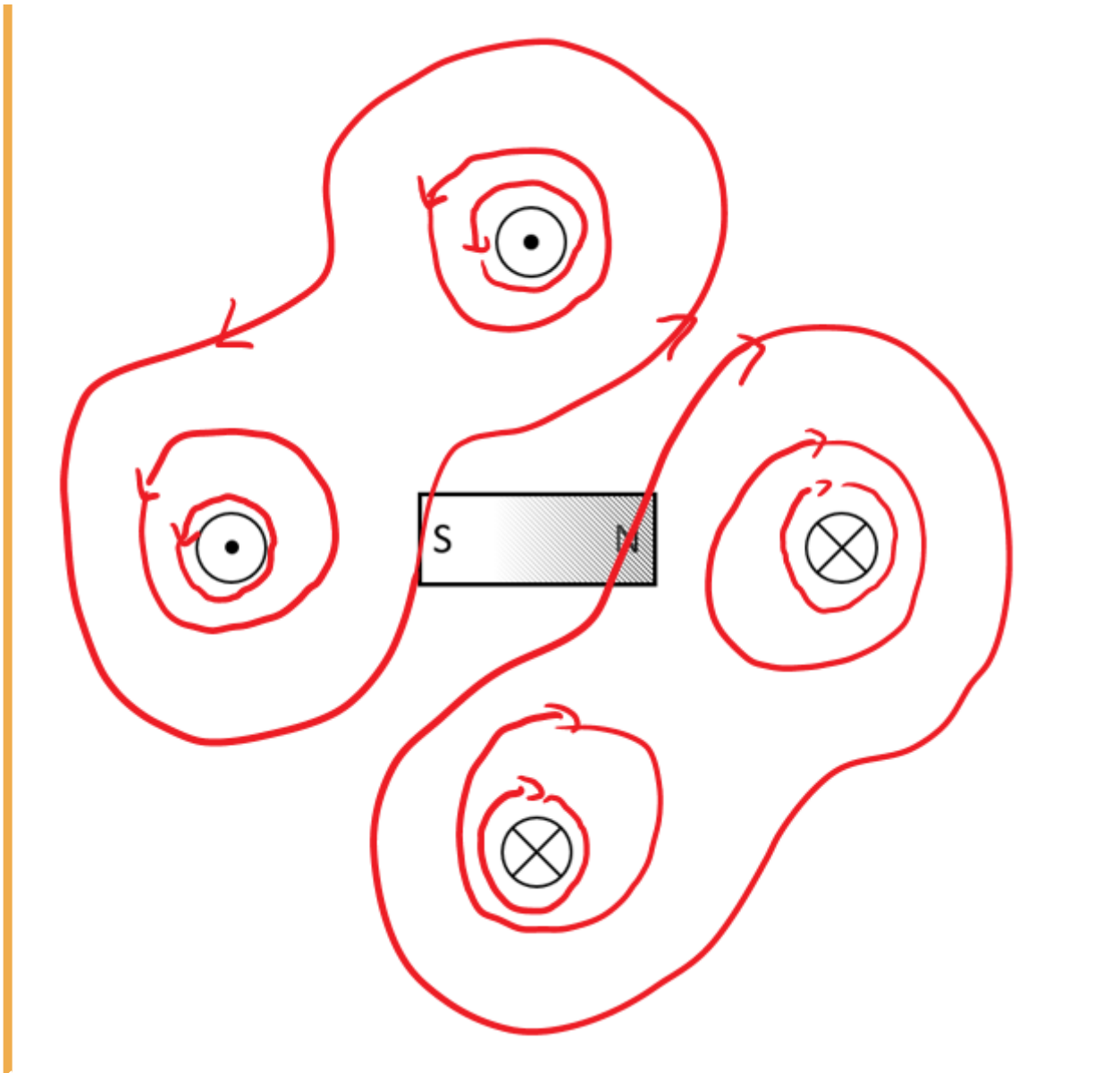
- A permanent magnet is located in between the conductors.

- The H-field is defined by currents $\sum I = \int H \{ \text{r m d} \} s$.
- In the permanent magnet, there are no free currents.
- The bound currents (of the permanent magnet) create also an H field.
- This exits on the north pole and enters the magnet on the south pole (similar to the B-field)_
- $H = B/\mu$
- The H-field from task 1 gets distracted



st 10 field lines of the H-field
and density for the shown

.. D
qua
are:
Res



Exercise E1 Magnetic Potential

(written test, approx. 8 % of a 120-minute written test, SS2024)

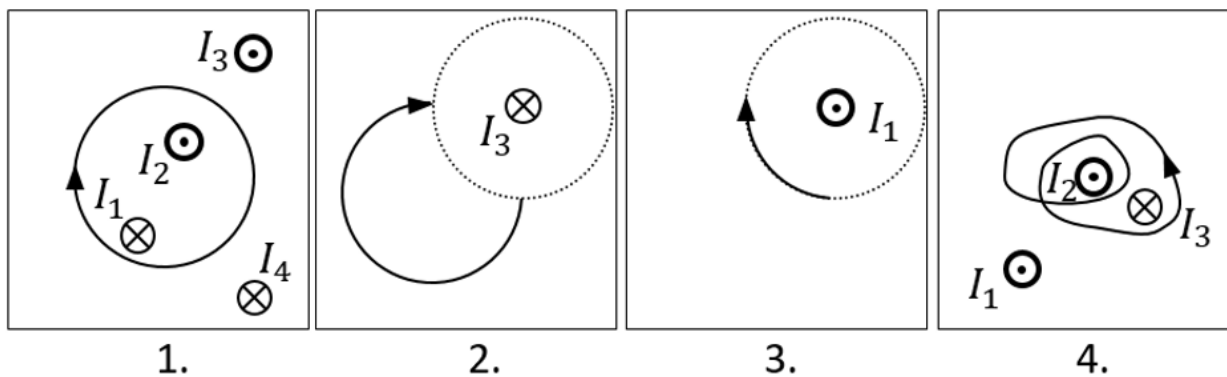
Calculate the magnetic potential difference V_{m} for the following paths as shown by the solid lines.

Dotted lines are only for there for symmetry aspects!

The wires conduct the following currents:

- $|I_1| = 2 \text{ A}$
- $|I_2| = 5 \text{ A}$
- $|I_3| = 11 \text{ A}$
- $|I_4| = 7 \text{ A}$

Pay attention to the signs of the currents (given by the diagrams) and of the results!



Result

Based on the right-hand rule and the part of a full revolution the following results:

1. Task: $+I_1 - I_2 = -3 \text{ ~\rm A}$
2. Task: $+{\frac{1}{4}} I_3 = 11/4 \text{ ~\rm A}$ (it does not matter which way the path goes from the startpoint to the endpoint, as long as it has the same direction and number of revolutions)
3. Task: $-{\frac{1}{4}} I_1 = -0.5 \text{ ~\rm A}$
4. Task: $+2 \cdot I_2 - 1 \cdot I_3 = -1 \text{ ~\rm A}$

Embedded resources

Explanation (video): ...

From:
<https://wiki.mexle.org/> - **MEXLE Wiki**

Permanent link:
https://wiki.mexle.org/electrical_engineering_and_electronics_1/block16?rev=1763836407

Last update: **2025/11/22 19:33**

