

Photodiode as current source

Student Group

First Name	Surname	Matrikel Nr.

Table of Contents

Photo Diode as current source 2

Photo Diode as current source

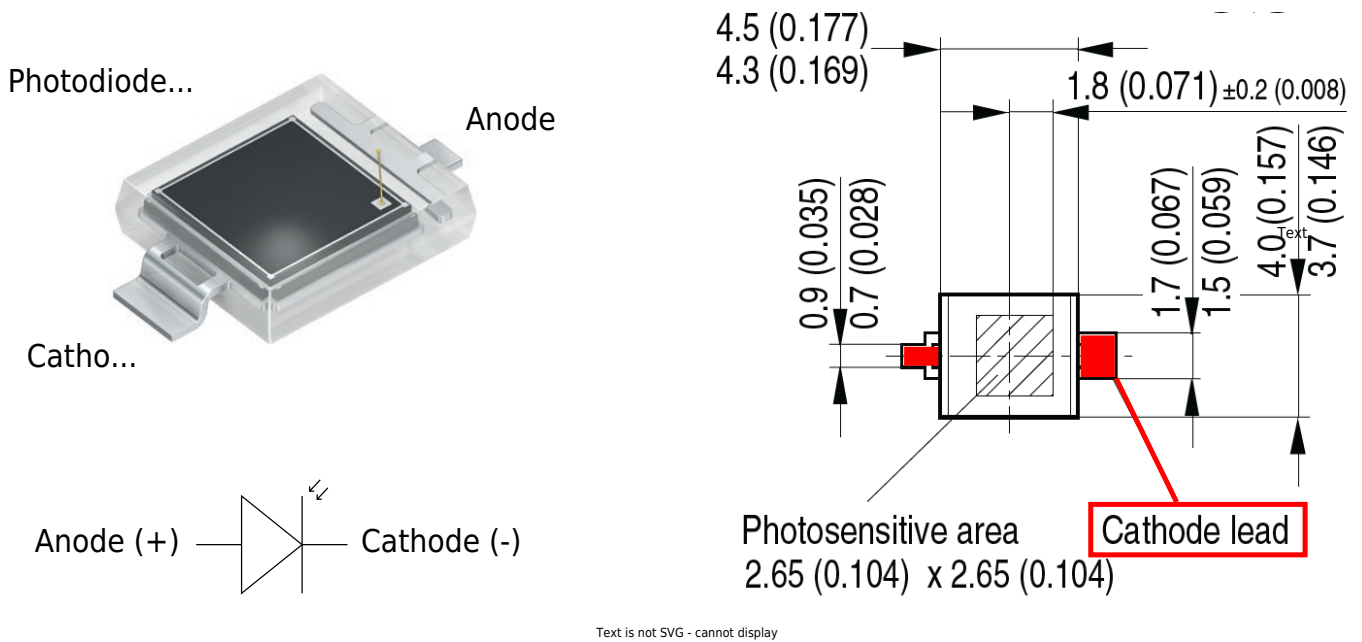


Fig. 2: Inverting Op-Amp: Photo Diode BPW 34 S

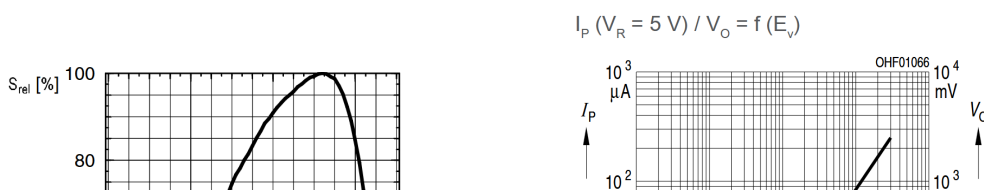


Fig. 3: Inverting Op-Amp: Diagramms of BPW 34 S

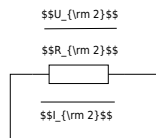


Fig. 4: Inverting Op-Amp: Photo Diode as current source

$$U_{DD} \approx 10\text{V}, U_{SS} \approx -10\text{V}$$

We assume a good illuminated room of 300 lx, illuminated by a white LED. White light is a mixture of many wavelengths across the visible spectrum, roughly 380 to 780 nm. For a typical white LED, the spectrum usually comes from a blue LED chip with a peak around 450 nm, plus a broader phosphor emission that spreads across green, yellow, and red wavelengths. For an easier calculation, we take a mean value of 500 nm which is close to the peak value of the blue LED (in reality a greenish light) and 300 lx for the illumination. The graph in figure 3 shows that the photodiode sensitivity at 500 nm is only 30%. The maximum current (100%) at 300 lx is 30 μA . We can now estimate the current we would expect from the diode at 300 lx:

$$I_1 = 30\ \mu\text{A} * 0.3 = 9\ \mu\text{A}$$

$$I_1 \approx 10\ \mu\text{A}$$

30% of 30 μA is roughly 10 μA .

Complete the arrows in the schematic of the circuit. Calculate R_2 so that $U_{OUT} = 5\text{V}$ at 300 lx. Take a resistor from the E6 series that is as close as possible to the calculated value. Also fill in the values for I_1 , I_2 , U_{OUT} and U_2

$$I_1 =$$

$$I_2 =$$

U_{OUT}

U_2

R_2

What value would you expect for U_D and why?

U_D

\dots

\dots

\dots

\dots

\dots

\dots

What value would you expect for U_D at 300 lx when it is not connected to the Op-Amp or any other electronic component (open-circuit voltage) and why?

$U_{D} \approx$

.....}

.....}

.....}

.....}

.....}

.....}

Illumination	U_{OUT} [mV]	I_1 [μA]	I_2 [μA]	U_D [mV]	U_D [mV]
dark...					
300 lx...		...			

Tab. 1: Photodiode measured values

From: <https://wiki.mexle.org/> - MEXLE Wiki

Permanent link: https://wiki.mexle.org/lab05_en/inverting_op-amp_photo_diode_as_current_source?rev=1776686759

Last update: 2026/04/20 14:05

